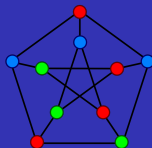


Graph Theory, Part 1



Lecture Notes in Math 212 Discrete Mathematics

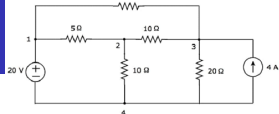
Sergey Finashin

METU, Depart. of Math


April, 2020



The idea of graph



People often use schemes where some objects are marked by nodes connected with links. Examples: transport networks, electrical circuits, etc.



Mathematically significant information in these examples is the graph

formed by a set of nodes, called **vertices** (usually marked as points on a plane) and a set of links called **edges** (drawn as lines connecting some vertices). Every edge connects two vertices called the **endpoints** of this edge. The endpoints are said to be **incident** to the edge. Vertices connected by an edge are called **adjacent**, or neighbors.

Adjacent Vertices



- 1 is adjacent to 2 and 3
- 2 is adjacent to 1, 3, and 4
- 3 is adjacent to 1 and 2
- 4 is adjacent to 2
- 5 is not adjacent to any vertex

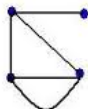
Variants of graphs

Simple graphs and other kinds

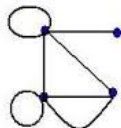
- If some pairs of points are connected by several edges, such kind of a graph is called **multigraph**.
- If in addition to multiple edge a graph is allowed to contain **loop-edges** connecting a vertex with itself, it is called **pseudograph**.
- If a graph has neither multiple edges nor loops, it is called **simple graphs**. Later on we usually suppose that the graphs are simple.
- If in a graph every edge is assigned a direction, it is called **directed graph** or **digraph**.



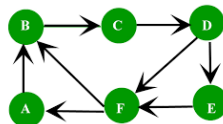
simple graph



multigraph



pseudograph



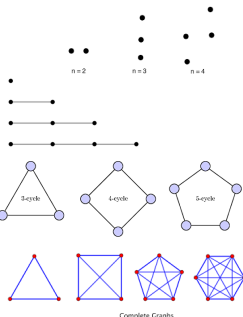
Directed Graph



Important examples

We suppose by definition that a graph contains at least one vertex, that is, its vertex set V is non-empty. But the set of edges E can be empty.

- If $E = \emptyset$, the graph is called **empty** or **nullgraph**.
- An **n -path graph** P_n has n vertices v_1, \dots, v_n and edges connecting v_i with v_{i+1} , $i = 1, \dots, n-1$.
- An **n -cycle graph** C_n , the vertices are cyclically connected like in polygon: v_i to v_{i+1} and v_n to v_1 .
- A graph is said to be **complete** if every pair of its vertices are connected by an edge (in other words, all vertices are adjacent to each other). A complete graph with n vertices will be denoted K_n .



Question: Find the number of edges in K_n . **Answer:** $\binom{n}{2} = \frac{n(n-1)}{2}$, which is the number of pairs of points.



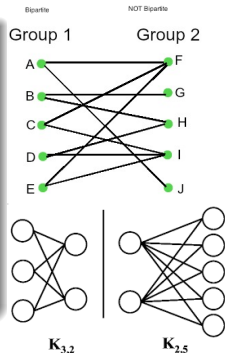
Bipartite graphs



A graph is called bipartite graph if its vertices

can be split in two groups (or can be colored in **two colors**), so that every edge have endpoints in different sets (of different colors).

In a **complete bipartite graph** every pair of vertices from different groups must be connected by an edge. Such graph is denoted $K_{m,n}$, where m and n are the numbers of vertices in the two groups.



- How many edges are in K_{mn} ? **Answer:** mn .
- Are path graphs P_n and cycle graphs C_n bipartite ? **Answer.** P_n is bipartite for any n : one group of vertices are v_1, v_3, \dots (odd indices) and another groups is v_2, v_4, \dots (even indices). C_n is bipartite for even n and not for odd n (since the colors of vertices alternate).

A bipartite graph cannot contain **triangles** and more generally, **odd-length cycles**.



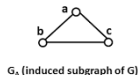
Subgraphs



Graphs are denoted as pairs $G = (V, E)$, where V and E are the sets of vertices and edges.

A subgraph of graph $G = (V, E)$ is a graph $G_1 = (V_1, E_1)$ such that $V_1 \subset V$ and $E_1 \subset E$. **Warning:** it is important to check that for every edge in E_1 its endpoints belong to V_1 , otherwise G_1 is not a graph.

- G_1 is called **spanning subgraph** if $V_1 = V$.
- G_1 is called **subgraph induced by subset of vertices V_1** if it includes all the edges whose endpoints belong to V_1 .



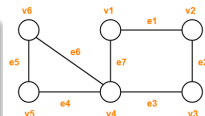
Exercises: prove that

- if a subgraph G_1 of graph G is spanning and induced, then $G_1 = G$;
- a subgraph of a bipartite graph is also bipartite.

Paths and cycles in a graph

A **path** or a **cycle** in a graph can be represented by subgraphs which are path graphs and cycle graphs respectively. Formal definitions:

A walk in a graph is a sequence of consecutive vertices linked by edges: $v_1, e_1, v_2, e_2, \dots, e_{n-1}, v_n$, where edge e_i connects v_i with v_{i+1} . A walk is called **closed** if $v_n = v_1$.



For simple graphs the edges are determined by their endpoints and a walk can be denoted just v_1, \dots, v_n .

- A **trail** is a kind of a walk without repetitions of edges. A **closed** trail is called a **circuit**.
- A **path** is a kind of a trail (walk) without repetitions of vertices. A closed path is called a **cycle**.

	Vertices	Edges	
Walks	Repetition allowed	Repetition allowed	
Trails	Repetition allowed	No repetition of edges	
Paths	No repetition of vertices except possibly starting and terminal vertices	No repetition of edges	
Circuits	Repetition allowed	No repetition of edges	A nontrivial closed trail
Cycles	No repetition of vertices except starting and terminal vertices	No repetition of edges	A nontrivial closed trail without repetition of vertices except starting and terminal vertices



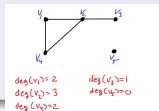
Degree (valency) of a vertex

Degree or valency of a vertex v in a graph

is the number of edges incident to this vertex, notation $\deg(v)$. In a simple graph it is the same as the number of vertices adjacent to v .

Exercise: give an example of multigraph for which it is not the same.

- vertices of degree 0 are called **isolated**
- vertices of degree 1 are called **pendant**.



Hand-shaking theorem

The sum of degrees of all vertices in a graph $G = (V, E)$ (possibly multigraph) equals to the double number of its edges: $\sum_{v \in V} \deg(v) = 2|E|$.

Proof. If an edge has endpoints v and w , then it contributes 2 to the sum $\sum_{v \in V} \deg(v)$: 1 in summand $\deg(v)$ and 1 in $\deg(w)$.

Corollary: in a graph there are even number of vertices of odd degree.

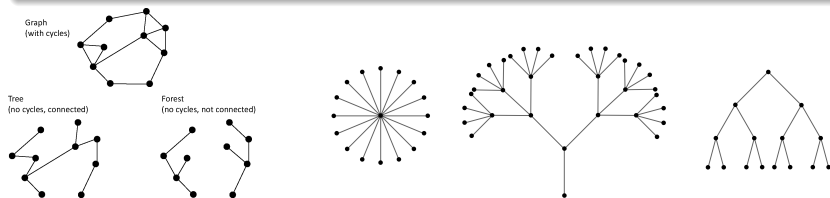
Proof: because the sum of all the degrees is even.

Trees

A graph is said to be **connected** if any pair of its vertices can be connected by a path (equivalently, by a trail or a walk).

A tree is a connected graph that does not contain cycles

A graph without cycles, but not connected is called **forest**. It contains several **connected components**, which are trees.

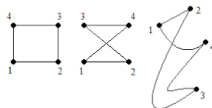


- In a tree $v = e + 1$, where v , e are the numbers of vertices and edges.
- In a tree every pair of vertices can be linked by a unique path.
- Pendant vertices (of degree 1) in a tree are called **leaves**.
- A tree has at least two **leaves**.



Isomorphism of graphs

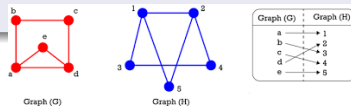
Informally speaking, isomorphic graphs differ just by the way of their presentation in the plane: **vertices and edges may change their position, but cannot appear or disappear.**



First, assume that $G_1 = (V_1, E_1)$ and $G_2 = (V_2, E_2)$ are simple graphs.

An isomorphism between graphs G_1 and G_2

is a bijective correspondence between their vertices, $f : V_1 \rightarrow V_2$, such that a pair of vertices $v, w \in V_1$ are adjacent in G_1 if and only if their images $f(v), f(w)$ are adjacent in G_2 .



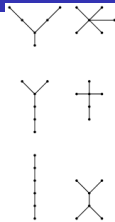
Bijection f is defined by a list of correspondence between sets V_1 and V_2

In the definition of isomorphism for multigraphs G_1 and G_2

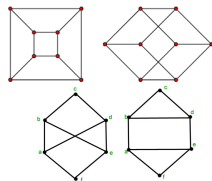
we require in addition to f a bijection between edges $\tilde{f} : E_1 \rightarrow E_2$, such that that a vertex $v \in V_1$ and edge $e \in E_1$ are incident if and only if $f(v)$ and $\tilde{f}(e)$ are incident.

Examples of isomorphism

Example: six non-isomorphic trees with six vertices. In all examples except two, non-isomorphism is proved by counting the number of vertices of different degrees. How to prove that two exceptional examples are not isomorphic? Note that in one of them the vertices of degree 2 are adjacent, and in the other are not.

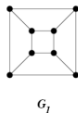
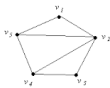


Exercise: show isomorphism of two graphs by labeling their corresponding vertices with $1, \dots, 8$



How to prove non-isomorphism of these two graphs?
Note that one of them is bipartite and the other is not!

Exercise: prove or disprove isomorphisms of the following graphs.



G_1



G_2



G_3